

Name: _____ Level: _____

LANDSCAPES
INLAND LANDSCAPES

Look at the pictures. What's the difference between them?



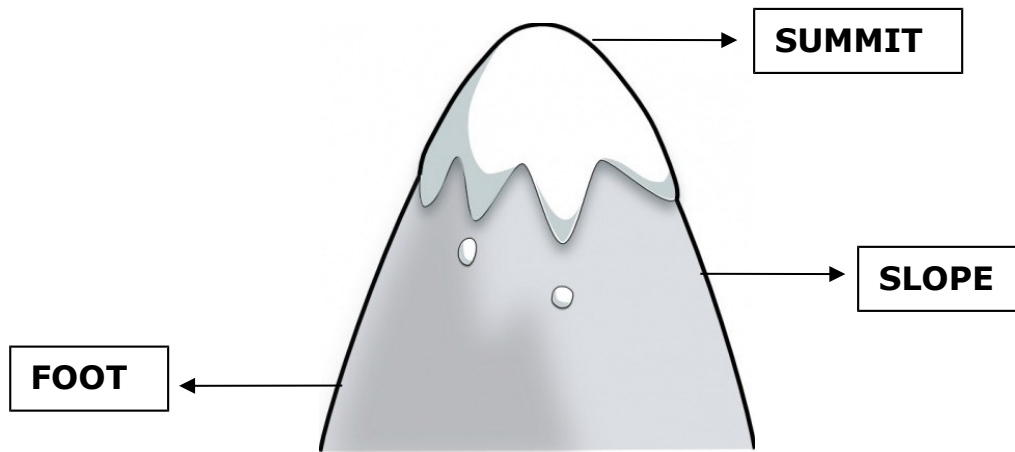
A landscape is all we see of a place. There are coastal landscapes and inland landscapes.

Inland landscapes are far away from the sea. They can be **mountain landscapes** and **plain landscapes**.

Name: _____ Level: _____

MOUNTAIN LANDSCAPES

Mountain landscapes have mountains. **Mountains** are natural elevation of land. Mountains have three parts: **summit**, **slope** and **foot**.

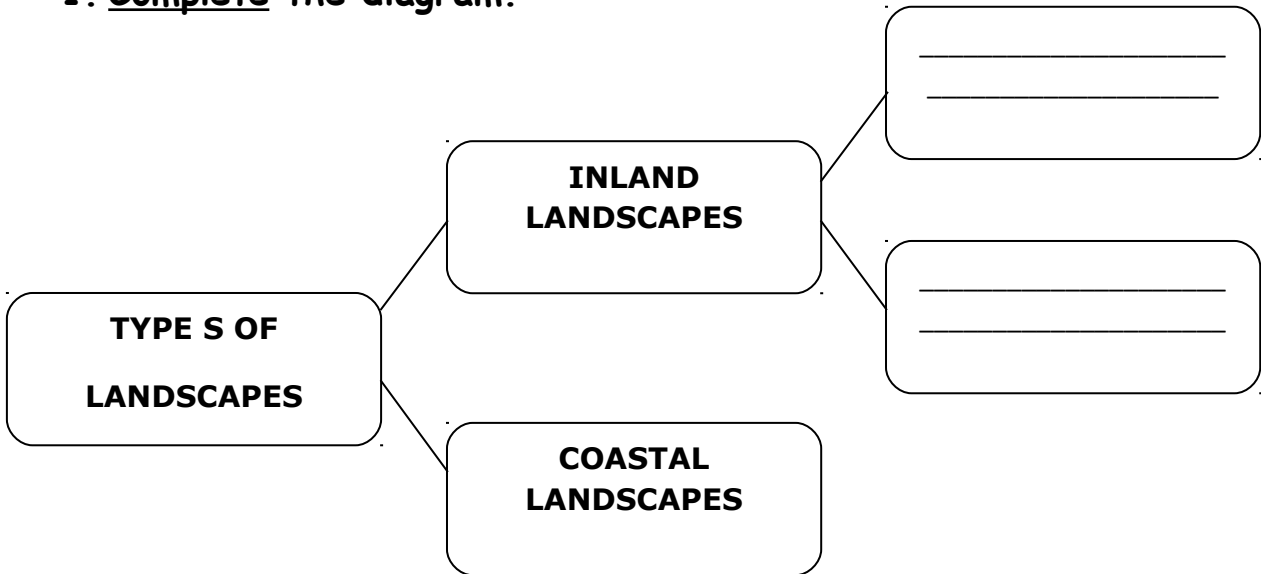


In mountains landscapes there are also **valleys**. The valleys are plain lands between mountains.



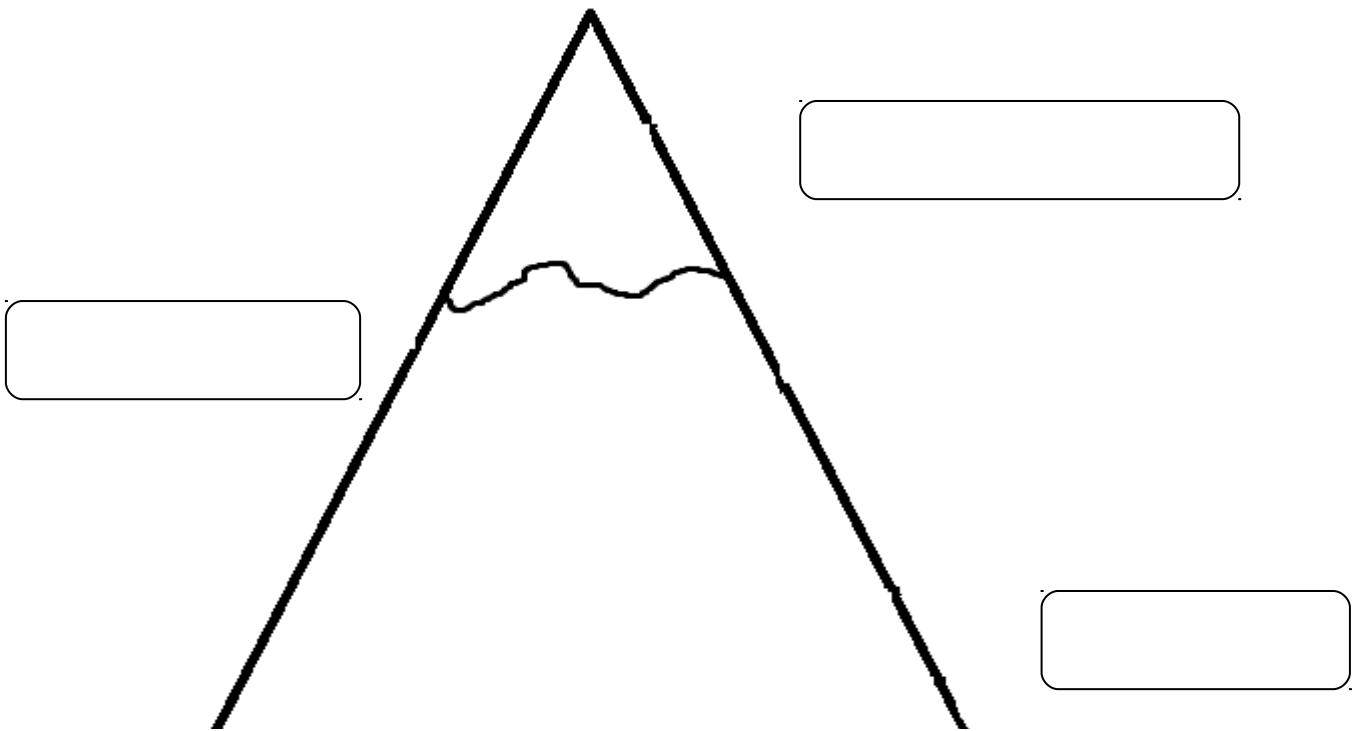
Name: _____ Level: _____

1. Complete the diagram.



2. Read the text, label the mountain and draw.

"There is a mouse in the summit of the mountain. In the slope there are two snakes and in the foot there are three flowers."



Name: _____ Level: _____

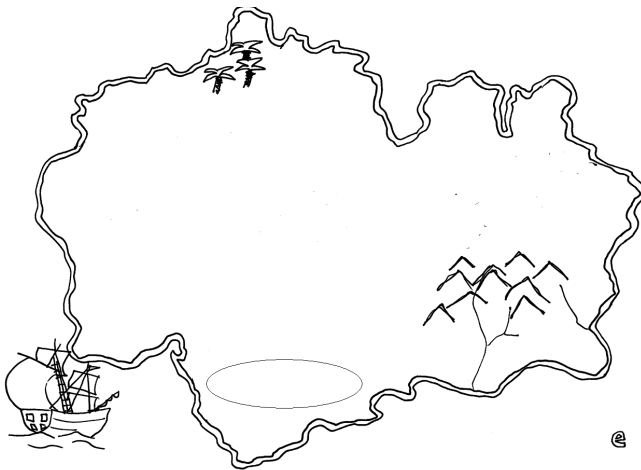
CARDINAL DIRECTIONS

Maps are pictures that show the elements in a landscape, such as mountains, rivers or lakes.

Maps have the **cardinal directions** that help us to guide. They are; **North, South, East and West**



3. Look at the map, complete the sentences and draw.



| |
|---|
| <p>The trees are at the _____</p> <p>The lake is at the _____</p> <p>The mountains are at the _____</p> <p>The river is at the _____</p> <p>The bush is at the _____</p> <p>The grass is at the _____</p> |
|---|

Name: _____ Level: _____

4. Write mountain or plain in the landscapes.













5. Complete the sentences to answer the questions.


- What's the **difference** between a mountain and a plain landscape?

In the mountain landscape there are _____ and _____

- What do mountain and plain landscapes have in common?

They may have _____

6. Write the cardinal directions in the compass.



UNIT 9: LANDSCAPES

Name: _____ Level: _____
